

## Chapter 2

### Fundamentals

#### ANSWERS TO MULTIPLE-CHOICE TYPE QUESTIONS

2.1	b	2.19	a
2.2	a	2.20	A. c B. a C. b
2.3	c	2.21	a
2.4	a	2.22	a
2.5	b	2.23	b
2.6	c	2.24	a
2.7	a	2.25	a
2.8	c	2.26	b
2.9	a	2.27	a
2.10	c	2.28	b
2.11	a	2.29	a
2.12	b	2.30	(i) c (ii) b (iii) a (iv) d
2.13	b	2.31	a
2.14	c	2.32	a
2.15	a		
2.16	b		
2.17	A. a B. b C. a		
2.18	c		

Full file at <https://MyTestbank.eu/>

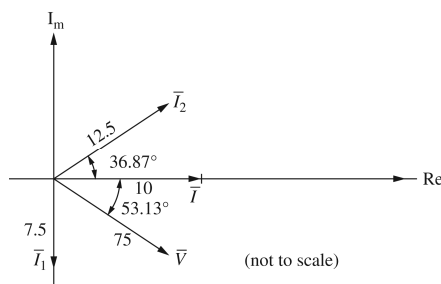
- 2.1 (a)  $\bar{A}_1 = 6\angle 30^\circ = 6[\cos 30^\circ + j\sin 30^\circ] = 5.20 + j3$   
 (b)  $\bar{A}_2 = -4 + j5 = \sqrt{16 + 25} \angle \tan^{-1} \frac{5}{-4} = 6.40 \angle 128.66^\circ = 6.40e^{j128.66^\circ}$   
 (c)  $\bar{A}_3 = (5.20 + j3) + (-4 + j5) = 1.20 + j8 = 8.01 \angle 81.50^\circ$   
 (d)  $\bar{A}_4 = (6\angle 30^\circ)(6.40 \angle 128.66^\circ) = 38.414 \angle 158.658^\circ = -35.78 + j13.98$   
 (e)  $\bar{A}_5 = (6\angle 30^\circ) / (6.40 \angle -128.66^\circ) = 0.94 \angle 158.66^\circ = 0.94e^{j158.66^\circ}$

- 2.2 (a)  $\bar{I} = 500 \angle -30^\circ = 433.01 - j250$   
 (b)  $i(t) = 4\sin(\omega t + 30^\circ) = 4\cos(\omega t + 30^\circ - 90^\circ) = 4\cos(\omega t - 60^\circ)$   
 $\bar{I} = (4) \angle -60^\circ = 2.83 \angle -60^\circ = 1.42 - j2.45$   
 (c)  $\bar{I} = (5/\sqrt{2}) \angle -15^\circ + 4 \angle -60^\circ = (3.42 - j0.92) + (2 - j3.46)$   
 $= 5.42 - j4.38 = 6.964 \angle -38.94^\circ$

- 2.3 (a)  $V_{\max} = 400 \text{ V}; I_{\max} = 100 \text{ A}$   
 (b)  $V = 400/\sqrt{2} = 282.84 \text{ V}; I = 100/\sqrt{2} = 70.71 \text{ A}$   
 (c)  $\bar{V} = 282.84 \angle 30^\circ \text{ V}; \bar{I} = 70.71 \angle -80^\circ \text{ A}$

- 2.4 (a)  $\bar{I}_1 = 10 \angle 0^\circ \frac{-j6}{8 + j6 - j6} = 10 \frac{6 \angle -90^\circ}{8} = 7.5 \angle -90^\circ \text{ A}$   
 $\bar{I}_2 = \bar{I} - \bar{I}_1 = 10 \angle 0^\circ - 7.3 \angle -90^\circ = 10 + j7.5 = 12.5 \angle 36.87^\circ \text{ A}$   
 $\bar{V} = \bar{I}_2 (-j6) = (12.5 \angle 36.87^\circ)(6 \angle -90^\circ) = 75 \angle -53.13^\circ \text{ V}$

(b)



- 2.5 (a)  $v(t) = 277\sqrt{2} \cos(\omega t + 30^\circ) = 391.7 \cos(\omega t + 30^\circ) \text{ V}$   
 (b)  $\bar{I} = \bar{V} / 20 = 13.85 \angle 30^\circ \text{ A}$   
 $i(t) = 19.58 \cos(\omega t + 30^\circ) \text{ A}$   
 (c)  $\bar{Z} = j\omega L = j(2\pi 60)(10 \times 10^{-3}) = 3.771 \angle 90^\circ \Omega$   
 $\bar{I} = \bar{V} / \bar{Z} = (277 \angle 30^\circ) / (3.771 \angle 90^\circ) = 73.46 \angle -60^\circ \text{ A}$   
 $i(t) = 73.46 \sqrt{2} \cos(\omega t - 60^\circ) = 103.9 \cos(\omega t - 60^\circ) \text{ A}$

Full file at <https://MyTestbank.eu/>

Full file at <https://MyTestbank.eu/>

(d)  $\bar{Z} = -j25 \Omega$   
 $\bar{I} = \bar{V} / \bar{Z} = (277 \angle 30^\circ) / (25 \angle -90^\circ) = 11.08 \angle 120^\circ \text{ A}$   
 $i(t) = 11.08\sqrt{2} \cos(\omega t + 120^\circ) = 15.67 \cos(\omega t + 120^\circ) \text{ A}$

2.6 (a)  $\bar{V} = (75/\sqrt{2}) \angle -15^\circ = 53.03 \angle -15^\circ$ ;  $\omega$  does not appear in the answer.

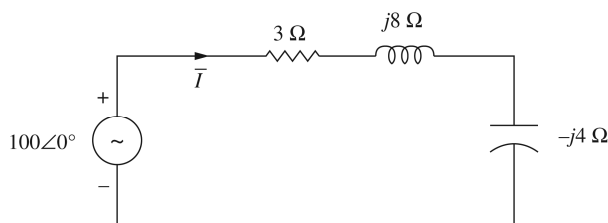
(b)  $v(t) = 50\sqrt{2} \cos(\omega t + 10^\circ)$ ; with  $\omega = 377$ ,  
 $v(t) = 70.71 \cos(377t + 10^\circ)$

(c)  $\bar{A} = A \angle \alpha$ ;  $\bar{B} = B \angle \beta$ ;  $\bar{C} = \bar{A} + \bar{B}$

$c(t) = a(t) + b(t) = \sqrt{2} \operatorname{Re}[\bar{C}e^{j\omega t}]$

The resultant has the same frequency  $\omega$ .

2.7 (a) The circuit diagram is shown below:



(b)  $\bar{Z} = 3 + j8 - j4 = 3 + j4 = 5 \angle 53.1^\circ \Omega$

(c)  $\bar{I} = (100 \angle 0^\circ) / (5 \angle 53.1^\circ) = 20 \angle -53.1^\circ \text{ A}$

The current lags the source voltage by  $53.1^\circ$

Power Factor =  $\cos 53.1^\circ = 0.6$  Lagging

2.8  $\bar{Z}_{LT} = j(377)(30.6 \times 10^{-6}) = j11.536 \text{ m}\Omega$

$\bar{Z}_{LL} = j(377)(5 \times 10^{-3}) = j1.885 \Omega$

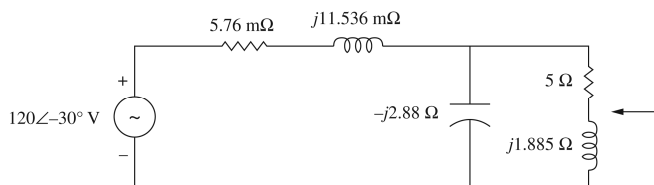
$\bar{Z}_C = -j \frac{1}{(377)(921 \times 10^{-6})} = -j2.88 \Omega$

$\bar{V} = \frac{120\sqrt{2}}{\sqrt{2}} \angle -30^\circ \text{ V}$

Full file at <https://MyTestbank.eu/>

Full file at <https://MyTestbank.eu/>

The circuit transformed to phasor domain is shown below:



$$\begin{aligned}
 \mathbf{2.9} \quad KVL: \quad 120\angle 0^\circ &= (60\angle 0^\circ)(0.1 + j0.5) + \bar{V}_{LOAD} \\
 \therefore \bar{V}_{LOAD} &= 120\angle 0^\circ - (60\angle 0^\circ)(0.1 + j0.5) \\
 &= 114.1 - j30.0 = 117.9\angle -14.7^\circ \text{ V} \leftarrow
 \end{aligned}$$

$$\begin{aligned}
 \mathbf{2.10} \quad (a) \quad p(t) &= v(t)i(t) = [400\cos(\omega t + 30^\circ)][100\cos(\omega t - 80^\circ)] \\
 &= \frac{1}{2}(400)(100)[\cos 110^\circ + \cos(2\omega t - 50^\circ)] \\
 &= -6840.4 + 2 \times 10^4 \cos(2\omega t - 50^\circ) \text{ W}
 \end{aligned}$$

$$\begin{aligned}
 (b) \quad P &= VI \cos(\delta - \beta) = (282.84)(70.71) \cos(30^\circ + 80^\circ) \\
 &= -6840 \text{ W} \quad \text{Absorbed} \\
 &= +6840 \text{ W} \quad \text{Delivered}
 \end{aligned}$$

$$\begin{aligned}
 (c) \quad Q &= VI \sin(\delta - \beta) = (282.84)(70.71) \sin 110^\circ \\
 &= 18.79 \text{ kVAR Absorbed}
 \end{aligned}$$

(d) The phasor current  $(-\bar{I}) = 70.71\angle -80^\circ + 180^\circ = 70.71\angle 100^\circ$  A leaves the positive terminal of the generator.

The generator power factor is then  $\cos(30^\circ - 100^\circ) = 0.3420$  leading

$$\begin{aligned}
 \mathbf{2.11} \quad (a) \quad p(t) &= v(t)i(t) = 391.7 \times 19.58 \cos^2(\omega t + 30^\circ) \\
 &= 0.7669 \times 10^4 \left(\frac{1}{2}\right) [1 + \cos(2\omega t + 60^\circ)] \\
 &= 3.834 \times 10^3 + 3.834 \times 10^3 \cos(2\omega t + 60^\circ) \text{ W} \\
 P &= VI \cos(\delta - \beta) = 277 \times 13.85 \cos 0^\circ = 3.836 \text{ kW} \\
 Q &= VI \sin(\delta - \beta) = 0 \text{ VAR}
 \end{aligned}$$

$$\text{Source Power Factor} = \cos(\delta - \beta) = \cos(30^\circ - 30^\circ) = 1.0$$

$$\begin{aligned}
 (b) \quad p(t) &= v(t)i(t) = 391.7 \times 103.9 \cos(\omega t + 30^\circ) \cos(\omega t - 60^\circ) \\
 &= 4.07 \times 10^4 \left(\frac{1}{2}\right) [\cos 90^\circ + \cos(2\omega t - 30^\circ)] \\
 &= 2.035 \times 10^4 \cos(2\omega t - 30^\circ) \text{ W} \\
 P &= VI \cos(\delta - \beta) = 277 \times 73.46 \cos(30^\circ + 60^\circ) = 0 \text{ W} \\
 Q &= VI \sin(\delta - \beta) = 277 \times 73.46 \sin 90^\circ = 20.35 \text{ kVAR} \\
 pf &= \cos(\delta - \beta) = 0 \text{ Lagging}
 \end{aligned}$$

Full file at <https://MyTestbank.eu/>

Full file at <https://MyTestbank.eu/>

$$\begin{aligned}
 \text{(c) } p(t) &= v(t)i(t) = 391.7 \times 15.67 \cos(\omega t + 30^\circ) \cos(\omega t + 120^\circ) \\
 &= 6.138 \times 10^3 \left( \frac{1}{2} \right) [\cos(-90^\circ) + \cos(2\omega t + 150^\circ)] = 3.069 \times 10^3 \cos(2\omega t + 150^\circ) \text{ W} \\
 P &= VI \cos(\delta - \beta) = 277 \times 11.08 \cos(30^\circ - 120^\circ) = 0 \text{ W} \\
 Q &= VI \sin(\delta - \beta) = 277 \times 11.08 \sin(-90^\circ) \\
 &= -3.069 \text{ kVAR Absorbed} = +3.069 \text{ kVAR Delivered} \\
 pf &= \cos(\delta - \beta) = \cos(-90^\circ) = 0 \text{ Leading}
 \end{aligned}$$

$$\begin{aligned}
 \text{2.12 (a) } p_R(t) &= (359.3 \cos \omega t)(35.93 \cos \omega t) \\
 &= 6455 + 6455 \cos 2\omega t \text{ W} \\
 \text{(b) } p_x(t) &= (359.3 \cos \omega t)[14.37 \cos(\omega t + 90^\circ)] \\
 &= 2582 \cos(2\omega t + 90^\circ) \\
 &= -2582 \sin 2\omega t \text{ W} \\
 \text{(c) } P &= V^2/R = (359.3/\sqrt{2})^2 / 10 = 6455 \text{ W Absorbed} \\
 \text{(d) } Q &= V^2/X = (359.3/\sqrt{2})^2 / 25 = 2582 \text{ VAR S Delivered} \\
 \text{(e) } (\beta - \delta) &= \tan^{-1}(Q/P) = \tan^{-1}(2582/6455) = 21.8^\circ \\
 \text{Power factor} &= \cos(\delta - \beta) = \cos(21.8^\circ) = 0.9285 \text{ Leading}
 \end{aligned}$$

$$\begin{aligned}
 \text{2.13 } \bar{Z} &= R - jx_c = 10 - j25 = 26.93 \angle -68.2^\circ \Omega \\
 i(t) &= (359.3/26.93) \cos(\omega t + 68.2^\circ) \\
 &= 13.34 \cos(\omega t + 68.2^\circ) \text{ A} \\
 \text{(a) } p_R(t) &= [13.34 \cos(\omega t + 68.2^\circ)][133.4 \cos(\omega t + 68.2^\circ)] \\
 &= 889.8 + 889.8 \cos[2(\omega t + 68.2^\circ)] \text{ W} \\
 \text{(b) } p_x(t) &= [13.34 \cos(\omega t + 68.2^\circ)][333.5 \cos(\omega t + 68.2^\circ - 90^\circ)] \\
 &= 2224 \sin[2(\omega t + 68.2^\circ)] \text{ W} \\
 \text{(c) } P &= I^2 R = (13.34/\sqrt{2})^2 10 = 889.8 \text{ W} \\
 \text{(d) } Q &= I^2 X = (13.34/\sqrt{2})^2 25 = 2224 \text{ VAR S} \\
 \text{(e) } pf &= \cos[\tan^{-1}(Q/P)] = \cos[\tan^{-1}(2224/889.8)] \\
 &= 0.3714 \text{ Leading}
 \end{aligned}$$

Full file at <https://MyTestbank.eu/>

Full file at <https://MyTestbank.eu/>

2.14 (a)  $\bar{I} = 2\angle 0^\circ \text{ kA}$

$$\bar{V} = \bar{Z}\bar{I} = (3\angle -45^\circ)(2\angle 0^\circ) = 6\angle -45^\circ \text{ kV}$$

$$v(t) = 6\sqrt{2} \cos(\omega t - 45^\circ) \text{ kV}$$

$$p(t) = v(t)i(t) = [6\sqrt{2} \cos(\omega t - 45^\circ)][2\sqrt{2} \cos \omega t]$$

$$= 24 \left( \frac{1}{2} \right) [\cos(-45^\circ) + \cos(2\omega t - 45^\circ)]$$

$$= 8.49 + 12 \cos(2\omega t - 45^\circ) \text{ MW}$$

(b)  $P = VI \cos(\delta - \beta) = 6 \times 2 \cos(-45^\circ - 0^\circ) = 8.49 \text{ MW}$  Delivered

(c)  $Q = VI \sin(\delta - \beta) = 6 \times 2 \sin(-45^\circ - 0^\circ)$   
 $= -8.49 \text{ MVAR}$  Delivered =  $+8.49 \text{ MVAR}$  Absorbed

(d)  $pf = \cos(\delta - \beta) = \cos(-45^\circ - 0^\circ) = 0.707$  Leading

2.15 (a)  $\bar{I} = \left[ (4/\sqrt{2})\angle 60^\circ \right] / (2\angle 30^\circ) = \sqrt{2} \angle 30^\circ \text{ A}$

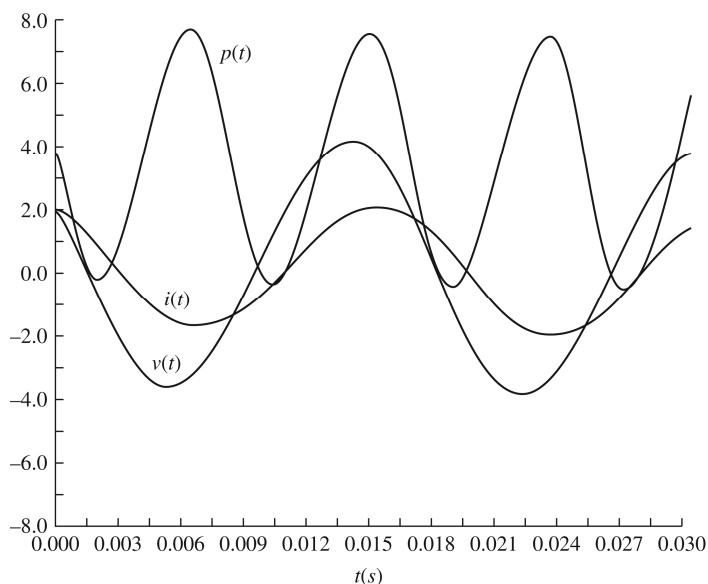
$$i(t) = 2 \cos(\omega t + 30^\circ) \text{ A with } \omega = 377 \text{ rad/s}$$

$$p(t) = v(t)i(t) = 4 [\cos 30^\circ + \cos(2\omega t + 90^\circ)]$$

$$= 3.46 + 4 \cos(2\omega t + 90^\circ) \text{ W}$$

(b)  $v(t)$ ,  $i(t)$ , and  $p(t)$  are plotted below.

(c) The instantaneous power has an average value of 3.46 W, and the frequency is twice that of the voltage or current.



Full file at <https://MyTestbank.eu/>

Full file at <https://MyTestbank.eu/>

$$2.16 \quad (a) \quad \bar{Z} = 10 + j120\pi \times 0.04 = 10 + j15.1 = 18.1 \angle 56.4^\circ \Omega$$

$$pf = \cos 56.4^\circ = 0.553 \text{ Lagging}$$

$$(b) \quad \bar{V} = 120 \angle 0^\circ \text{ V}$$

The current supplied by the source is

$$\bar{I} = (120 \angle 0^\circ) / (18.1 \angle 56.4^\circ) = 6.63 \angle -56.4^\circ \text{ A}$$

The real power absorbed by the load is given by

$$P = 120 \times 6.63 \times \cos 56.4^\circ = 440 \text{ W}$$

$$\text{which can be checked by } I^2 R = (6.63)^2 10 = 440 \text{ W}$$

The reactive power absorbed by the load is

$$Q = 120 \times 6.63 \times \sin 36.4^\circ = 663 \text{ VAR}$$

$$(c) \quad \text{Peak Magnetic Energy} = W = LI^2 = 0.04(6.63)^2 = 1.76 \text{ J}$$

$$Q = \omega W = 377 \times 1.76 = 663 \text{ VAR is satisfied.}$$

$$2.17 \quad (a) \quad \bar{S} = \bar{V}\bar{I}^* = \bar{Z}\bar{I}\bar{I}^* = \bar{Z}|\bar{I}|^2 = j\omega LI^2$$

$$Q = \text{Im}[\bar{S}] = \omega LI^2 \quad \leftarrow$$

$$(b) \quad v(t) = L \frac{di}{dt} = -\sqrt{2}\omega L I \sin(\omega t + \theta)$$

$$p(t) = v(t) \cdot i(t) = -2\omega L I^2 \sin(\omega t + \theta) \cos(\omega t + \theta)$$

$$= -\omega L I^2 \sin 2(\omega t + \theta) \quad \leftarrow$$

$$= -Q \sin 2(\omega t + \theta) \quad \leftarrow$$

$$\text{Average real power } P \text{ supplied to the inductor} = 0 \quad \leftarrow$$

Instantaneous power supplied (to sustain the changing energy in the magnetic field) has a maximum value of  $Q$ .  $\leftarrow$

$$2.18 \quad (a) \quad \bar{S} = \bar{V}\bar{I}^* = \bar{Z}\bar{I}\bar{I}^* = \text{Re}[\bar{Z}I^2] + j \text{Im}[\bar{Z}I^2]$$

$$= P + jQ$$

$$\therefore P = Z I^2 \cos \angle Z; Q = Z I^2 \sin \angle Z \quad \leftarrow$$

$$(b) \quad \text{Choosing } i(t) = \sqrt{2} I \cos \omega t,$$

$$\text{Then } v(t) = \sqrt{2} Z I \cos(\omega t + \angle Z)$$

$$\therefore p(t) = v(t) \cdot i(t) = Z I^2 \cos(\omega t + \angle Z) \cdot \cos \omega t$$

$$= Z I^2 [\cos \angle Z + \cos(2\omega t + \angle Z)]$$

$$= Z I^2 [\cos \angle Z + \cos 2\omega t \cos \angle Z - \sin 2\omega t \sin \angle Z]$$

$$= P(1 + \cos 2\omega t) - Q \sin 2\omega t \quad \leftarrow$$

Full file at <https://MyTestbank.eu/>

Full file at <https://MyTestbank.eu/>

$$(c) \bar{Z} = R + j\omega L + \frac{1}{j\omega C}$$

From part (a),  $P = RI^2$  and  $Q = Q_L + Q_C$

$$\text{where } Q_L = \omega LI^2 \text{ and } Q_C = -\frac{1}{\omega C}I^2$$

which are the reactive powers into  $L$  and  $C$ , respectively.

Thus  $p(t) = P(1 + \cos 2\omega t) - Q_L \sin 2\omega t - Q_C \sin 2\omega t \leftarrow$

$$\left. \begin{array}{l} \text{If } \omega^2 LC = 1, \quad Q_L + Q_C = Q = 0 \\ \text{Then } \quad p(t) = P(1 + \cos 2\omega t) \end{array} \right\} \leftarrow$$

$$\begin{aligned} 2.19 \quad (a) \quad \bar{S} &= \bar{V}\bar{I}^* = \left( \frac{150}{\sqrt{2}} \angle 10^\circ \right) \left( \frac{5}{\sqrt{2}} \angle -50^\circ \right)^* = 375 \angle 60^\circ \\ &= 187.5 + j324.8 \end{aligned}$$

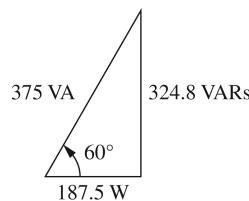
$$P = \text{Re} \bar{S} = 187.5 \text{ W Absorbed}$$

$$Q = \text{Im} \bar{S} = 324.8 \text{ VARs Absorbed}$$

$$(b) \quad pf = \cos(60^\circ) = 0.5 \text{ Lagging}$$

$$(c) \quad Q_s = P \tan \theta_s = 187.5 \tan[\cos^{-1} 0.9] = 90.81 \text{ VARs}$$

$$Q_c = Q_L - Q_s = 324.8 - 90.81 = 234 \text{ VARs}$$



$$2.20 \quad \bar{Y}_1 = \frac{1}{\bar{Z}_1} = \frac{1}{20 \angle 30^\circ} = 0.05 \angle -30^\circ = (0.0433 - j0.025) \text{ S} = G_1 - jB_1$$

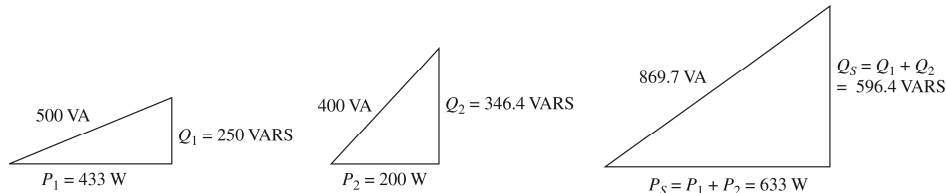
$$\bar{Y}_2 = \frac{1}{\bar{Z}_2} = \frac{1}{25 \angle 60^\circ} = 0.04 \angle -60^\circ = (0.02 - j0.03464) \text{ S} = G_2 + jB_2$$

$$P_1 = V^2 G_1 = (100)^2 0.0433 = 433 \text{ W Absorbed}$$

$$Q_1 = V^2 B_1 = (100)^2 0.025 = 250 \text{ VARs Absorbed}$$

$$P_2 = V^2 G_2 = (100)^2 0.02 = 200 \text{ W Absorbed}$$

$$Q_2 = V^2 B_2 = (100)^2 0.03464 = 346.4 \text{ VARs Absorbed}$$

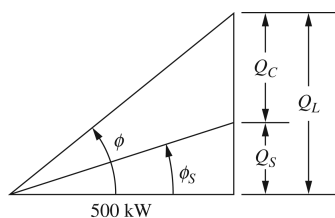


Full file at <https://MyTestbank.eu/>



Full file at <https://MyTestbank.eu/>

2.21 (a)



$$\begin{aligned}\phi_L &= \cos^{-1} 0.6 = 53.13^\circ \\ Q_L &= P \tan \phi_L = 500 \tan 53.13^\circ = 666.7 \text{ kVAR} \\ \phi_S &= \cos^{-1} 0.9 = 25.84^\circ \\ Q_S &= P \tan \phi_S = 500 \tan 25.84^\circ = 242.2 \text{ kVAR} \\ Q_C &= Q_L - Q_S = 666.7 - 242.2 = 424.5 \text{ kVAR} \\ S_C &= Q_C = 424.5 \text{ kVA}\end{aligned}$$

(b) The synchronous motor absorbs  $P_m = \frac{375}{0.9} = 416.7 \text{ kW}$  and  $Q_m = 0 \text{ kVAR}$



$$P_s = P + P_m = 500 + 416.7 = 916.7 \text{ kW}$$

$$\text{Source PF} = \cos \left[ \tan^{-1} (666.7/916.7) \right] = 0.809 \text{ Lagging}$$

$$\begin{aligned}2.22 \text{ (a)} \quad \bar{Y}_1 &= \frac{1}{\bar{Z}_1} = \frac{1}{(4 + j5)} = \frac{1}{6.4 \angle 51.34^\circ} = 0.16 \angle -51.34^\circ \\ &= (0.1 - j0.12) \text{ S}\end{aligned}$$

$$\bar{Y}_2 = \frac{1}{\bar{Z}_2} = \frac{1}{10} = 0.1 \text{ S}$$

$$P = V^2 (G_1 + G_2) \Rightarrow V = \sqrt{\frac{P}{G_1 + G_2}} = \sqrt{\frac{1000}{(0.1 + 0.1)}} = 70.71 \text{ V}$$

$$P_1 = V^2 G_1 = (70.71)^2 0.1 = 500 \text{ W}$$

$$P_2 = V^2 G_2 = (70.71)^2 0.1 = 500 \text{ W}$$

$$\begin{aligned}\text{(b)} \quad \bar{Y}_{eq} &= \bar{Y}_1 + \bar{Y}_2 = (0.1 - j0.12) + 0.1 = 0.2 - j0.12 \\ &= 0.233 \angle -30.96^\circ \text{ S}\end{aligned}$$

$$I_s = V Y_{eq} = 70.71(0.233) = 16.48 \text{ A}$$

Full file at <https://MyTestbank.eu/>

Full file at <https://MyTestbank.eu/>

$$2.23 \quad \bar{S} = \bar{V} \bar{I}^* = (120 \angle 0^\circ)(15 \angle -30^\circ) = 1800 \angle -30^\circ \\ = 1558.85 - j900$$

$$P = \text{Re} \bar{S} = 1558.85 \text{ W Delivered}$$

$$Q = \text{Im} \bar{S} = -900 \text{ VAR S Delivered} = +900 \text{ VAR S Absorbed}$$

$$2.24 \quad \bar{S}_1 = P_1 + jQ_1 = 10 + j0; \bar{S}_2 = 10 \angle \cos^{-1} 0.9 = 9 + j4.359$$

$$\bar{S}_3 = \frac{7.5}{0.85 \times 0.95} \angle -\cos^{-1} 0.95 = 9.288 \angle -18.19^\circ = 8.824 - j2.899$$

$$\bar{S}_S = \bar{S}_1 + \bar{S}_2 + \bar{S}_3 = 27.82 + j1.460 = 27.86 \angle 3.00^\circ$$

$$P_S = \text{Re}(\bar{S}_S) = 27.82 \text{ kW}$$

$$Q_S = \text{Im}(\bar{S}_S) = 1.460 \text{ kVAR}$$

$$S_S = |\bar{S}_S| = 27.86 \text{ kVA}$$

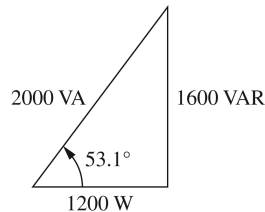
$$2.25 \quad \bar{S}_R = \bar{V}_R \bar{I}^* = R \bar{I} \bar{I}^* = I^2 R = (20)^2 3 = 1200 + j0$$

$$\bar{S}_L = \bar{V}_L \bar{I}^* = (jX_L \bar{I}) \bar{I}^* = jX_L I^2 = j8(20)^2 = 0 + j3200$$

$$\bar{S}_C = \bar{V}_C \bar{I}^* = (-jX_C \bar{I}) \bar{I}^* = -jX_C I^2 = -j4(20)^2 = 0 - j1600$$

$$\text{Complex power absorbed by the total load } \bar{S}_{LOAD} = \bar{S}_R + \bar{S}_L + \bar{S}_C = 2000 \angle 53.1^\circ$$

Power Triangle:

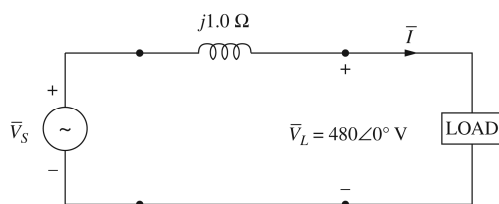


Complex power delivered by the source is

$$\bar{S}_{SOURCE} = \bar{V} \bar{I}^* = (100 \angle 0^\circ)(20 \angle -53.1^\circ)^* = 2000 \angle 53.1^\circ$$

The complex power delivered by the source is equal to the total complex power absorbed by the load.

2.26 (a) The problem is modeled as shown in figure below:



$$P_L = 120 \text{ kW}$$

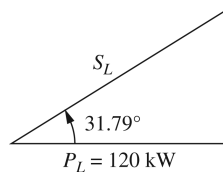
$$pf_L = 0.85 \text{ Lagging}$$

$$\theta_L = \cos^{-1} 0.85 = 31.79^\circ$$

Power triangle for the load:

Full file at <https://MyTestbank.eu/>

$$\begin{aligned}\bar{S}_L &= P_L + jQ_L = 141.18 \angle 31.79^\circ \text{ kVA} \\ I &= S_L / V = 141,180 / 480 = 294.13 \text{ A}\end{aligned}$$



$$\begin{aligned}Q_L &= P_L \tan(31.79^\circ) \\ &= 74.364 \text{ kVAR}\end{aligned}$$

Real power loss in the line is zero.

$$\begin{aligned}\text{Reactive power loss in the line is } Q_{LINE} &= I^2 X_{LINE} = (294.13)^2 \cdot 1 \\ &= 86.512 \text{ kVAR}\end{aligned}$$

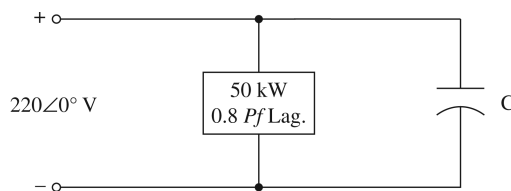
$$\therefore \bar{S}_S = P_S + jQ_S = 120 + j(74.364 + 86.512) = 200.7 \angle 53.28^\circ \text{ kVA}$$

The input voltage is given by  $V_S = S_S / I = 682.4 \text{ V (rms)}$

The power factor at the input is  $\cos 53.28^\circ = 0.6$  Lagging

$$\begin{aligned}\text{(b) Applying KVL, } \bar{V}_S &= 480 \angle 0^\circ + j1.0(294.13 \angle -31.79^\circ) \\ &= 635 + j250 = 682.4 \angle 21.5^\circ \text{ V (rms)} \\ (pf)_S &= \cos(21.5^\circ + 31.79^\circ) = 0.6 \text{ Lagging}\end{aligned}$$

**2.27** The circuit diagram is shown below:



$$\begin{aligned}P_{old} &= 50 \text{ kW}; \cos^{-1} 0.8 = 36.87^\circ; \theta_{OLD} = 36.87^\circ; Q_{old} = P_{old} \tan(\theta_{old}) \\ &= 37.5 \text{ kVAR}\end{aligned}$$

$$\therefore \bar{S}_{old} = 50,000 + j37,500$$

$$\begin{aligned}\theta_{new} &= \cos^{-1} 0.95 = 18.19^\circ; \bar{S}_{new} = 50,000 + j50,000 \tan(18.19^\circ) \\ &= 50,000 + j16,430\end{aligned}$$

$$\text{Hence } \bar{S}_{cap} = \bar{S}_{new} - \bar{S}_{old} = -j21,070 \text{ VA}$$

$$\therefore C = \frac{21,070}{(377)(220)^2} = 1155 \mu\text{F} \leftarrow$$

Full file at <https://MyTestbank.eu/>

Full file at <https://MyTestbank.eu/>

$$\begin{aligned}
 2.28 \quad \bar{S}_1 &= 15 + j6.667 \\
 \bar{S}_2 &= 3(0.96) - j3[\sin(\cos^{-1} 0.96)] = 2.88 - j0.84 \\
 \bar{S}_3 &= 15 + j0 \\
 \bar{S}_{TOTAL} &= \bar{S}_1 + \bar{S}_2 + \bar{S}_3 = (32.88 + j5.827) \text{ kVA}
 \end{aligned}$$

(i) Let  $\bar{Z}$  be the impedance of a series combination of  $R$  and  $X$

$$\begin{aligned}
 \text{Since } \bar{S} &= \bar{V}\bar{I}^* = \bar{V}\left(\frac{\bar{V}}{\bar{Z}}\right)^* = \frac{V^2}{\bar{Z}^*}, \text{ it follows that} \\
 \bar{Z}^* &= \frac{V^2}{\bar{S}} = \frac{(240)^2}{(32.88 + j5.827)10^3} = (1.698 - j0.301) \Omega \\
 \therefore \bar{Z} &= (1.698 + j0.301) \Omega \quad \leftarrow
 \end{aligned}$$

(ii) Let  $\bar{Z}$  be the impedance of a parallel combination of  $R$  and  $X$

$$\begin{aligned}
 \text{Then } R &= \frac{(240)^2}{(32.88)10^3} = 1.7518 \Omega \\
 X &= \frac{(240)^2}{(5.827)10^3} = 9.885 \Omega \\
 \therefore \bar{Z} &= (1.7518 \parallel j9.885) \Omega \quad \leftarrow
 \end{aligned}$$

2.29 Since complex powers satisfy KCL at each bus, it follows that

$$\begin{aligned}
 \bar{S}_{13} &= (1 + j1) - (1 - j1) - (0.4 + j0.2) = -0.4 + j1.8 \quad \leftarrow \\
 \bar{S}_{31} &= -\bar{S}_{13}^* = 0.4 + j1.8 \quad \leftarrow
 \end{aligned}$$

Similarly,  $\bar{S}_{23} = (0.5 + j0.5) - (1 + j1) - (-0.4 + j0.2) = -0.1 - j0.7 \quad \leftarrow$

$$\bar{S}_{32} = -\bar{S}_{23}^* = 0.1 - j0.7 \quad \leftarrow$$

At Bus 3,  $\bar{S}_{G3} = \bar{S}_{31} + \bar{S}_{32} = (0.4 + j1.8) + (0.1 - j0.7) = 0.5 + j1.1 \quad \leftarrow$

2.30 (a) For load 1:  $\theta_1 = \cos^{-1}(0.28) = 73.74^\circ$  Lagging

$$\begin{aligned}
 \bar{S}_1 &= 125 \angle 73.74^\circ = 35 + j120 \\
 \bar{S}_2 &= 10 - j40 \\
 \bar{S}_3 &= 15 + j0 \\
 \bar{S}_{TOTAL} &= \bar{S}_1 + \bar{S}_2 + \bar{S}_3 = 60 + j80 = 100 \angle 53.13^\circ \text{ kVA} = P + jQ \\
 \therefore P_{TOTAL} &= 60 \text{ kW}; Q_{TOTAL} = 80 \text{ kVAR}; \text{ kVA}_{TOTAL} = S_{TOTAL} = 100 \text{ kVA.} \quad \leftarrow \\
 \text{Supply } pf &= \cos(53.13^\circ) = 0.6 \text{ Lagging} \quad \leftarrow
 \end{aligned}$$

$$(b) \bar{I}_{TOTAL} = \frac{\bar{S}^*}{\bar{V}^*} = \frac{100 \times 10^3 \angle -53.13^\circ}{1000 \angle 0^\circ} = 100 \angle -53.13^\circ \text{ A}$$

At the new  $pf$  of 0.8 lagging,  $P_{TOTAL}$  of 60kW results in the new reactive power  $Q'$ , such that

Full file at <https://MyTestbank.eu/>

Full file at <https://MyTestbank.eu/>

$$\theta' = \cos^{-1}(0.8) = 36.87^\circ$$

and  $Q' = 60 \tan(36.87^\circ) = 45 \text{ kVAR}$

$\therefore$  The required capacitor's kVAR is  $Q_c = 80 - 45 = 35 \text{ kVAR} \leftarrow$

It follows then  $X_c = \frac{V^2}{S_c^*} = \frac{(1000)^2}{j35000} = -j28.57 \Omega$

and  $C = \frac{10^6}{2\pi(60)(28.57)} = 92.85 \mu\text{F} \leftarrow$

The new current is  $I' = \frac{\bar{S}^*}{\bar{V}^*} = \frac{60,000 - j45,000}{1000 \angle 0^\circ} = 60 - j45 = 75 \angle -36.87^\circ \text{ A}$

The supply current, in magnitude, is reduced from 100A to 75A  $\leftarrow$

**2.31** (a)  $\bar{I}_{12} = \frac{V_1 \angle \delta_1 - V_2 \angle \delta_2}{X \angle 90^\circ} = \left( \frac{V_1}{X} \angle \delta_1 - 90^\circ \right) - \frac{V_2}{X} \angle \delta_2 - 90^\circ$

Complex power  $\bar{S}_{12} = \bar{V}_1 \bar{I}_{12}^* = V_1 \angle \delta_1 \left[ \frac{V_1}{X} \angle 90^\circ - \delta_1 - \frac{V_2}{X} \angle 90^\circ - \delta_2 \right]$   
 $= \frac{V_1^2}{X} \angle 90^\circ - \frac{V_1 V_2}{X} \angle 90^\circ + \delta_1 - \delta_2$

$\therefore$  The real and reactive power at the sending end are

$$P_{12} = \frac{V_1^2}{X} \cos 90^\circ - \frac{V_1 V_2}{X} \cos(90^\circ + \delta_1 - \delta_2)$$

$$= \frac{V_1 V_2}{X} \sin(\delta_1 - \delta_2) \leftarrow$$

$$Q_{12} = \frac{V_1^2}{X} \sin 90^\circ - \frac{V_1 V_2}{X} \sin(90^\circ + \delta_1 - \delta_2)$$

$$= \frac{V_1}{X} [V_1 - V_2 \cos(\delta_1 - \delta_2)] \leftarrow$$

Note: If  $\bar{V}_1$  leads  $\bar{V}_2$ ,  $\delta = \delta_1 - \delta_2$  is positive and the real power flows from node 1 to node 2. If  $\bar{V}_1$  Lags  $\bar{V}_2$ ,  $\delta$  is negative and power flows from node 2 to node 1.

(b) Maximum power transfer occurs when  $\delta = 90^\circ = \delta_1 - \delta_2 \leftarrow$

$$P_{\text{MAX}} = \frac{V_1 V_2}{X} \leftarrow$$

**2.32** 4 Mvar minimizes the real power line losses, while 4.5 Mvar minimizes the MVA power flow into the feeder.

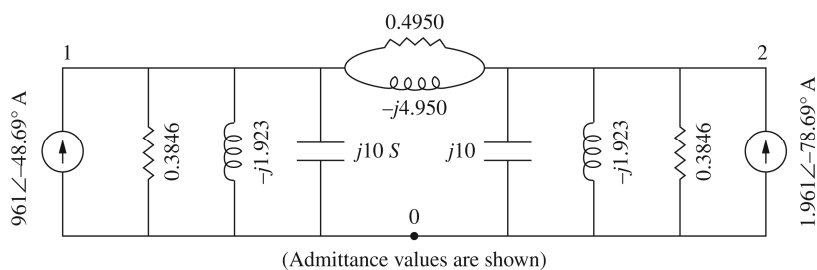
Full file at <https://MyTestbank.eu/>

2.33

Qcap	MW Losses	Mvar Losses
0	0.42	0.84
0.5	0.4	0.8
1	0.383	0.766
1.5	0.369	0.738
2	0.357	0.714
2.5	0.348	0.696
3	0.341	0.682
3.5	0.337	0.675
4	0.336	0.672
4.5	0.337	0.675
5	0.341	0.682
5.5	0.348	0.696
6	0.357	0.714
6.5	0.369	0.738
7	0.383	0.766
7.5	0.4	0.801
8	0.42	0.84
8.5	0.442	0.885
9	0.467	0.934
9.5	0.495	0.99
10	0.525	1.05

2.34 7.5 Mvars

2.35



Full file at <https://MyTestbank.eu/>

Full file at <https://MyTestbank.eu/>

$$\left[ \begin{array}{c|c} (.3846 + .4950) + j(10 - 1.923 - 4.950) & -(.4950 - j4.950) \\ \hline -(.4950 - j4.950) & (.3846 + .4950) + j(10 - 1.923 - 4.95) \end{array} \right] \begin{bmatrix} \bar{V}_{10} \\ \bar{V}_{20} \end{bmatrix} = \begin{bmatrix} 1.961 \angle -48.69^\circ \\ 1.961 \angle -78.69^\circ \end{bmatrix}$$

$$\left[ \begin{array}{c|c} 0.8796 + j3.127 & -0.4950 + j4.950 \\ \hline -0.4950 + j4.950 & -0.8796 + j3.127 \end{array} \right] \begin{bmatrix} \bar{V}_{10} \\ \bar{V}_{20} \end{bmatrix} = \begin{bmatrix} 1.961 \angle -48.69^\circ \\ 1.961 \angle -78.69^\circ \end{bmatrix}$$

**2.36** Note that there are two buses plus the reference bus and one line for this problem. After converting the voltage sources in Fig. 2.29 to current sources, the equivalent source impedances are:

$$\begin{aligned} \bar{Z}_{S1} = \bar{Z}_{S2} &= (0.1 + j0.5) // (-j0.1) = \frac{(0.1 + j0.5)(-j0.1)}{0.1 + j0.5 - j0.1} \\ &= \frac{(0.5099 \angle 78.69^\circ)(0.1 \angle -90^\circ)}{0.4123 \angle 75.96^\circ} = 0.1237 \angle -87.27^\circ \\ &= 0.005882 - j0.1235 \Omega \end{aligned}$$

The rest is left as an exercise to the student.

**2.37** After converting impedance values in Figure 2.30 to admittance values, the bus admittance matrix is:

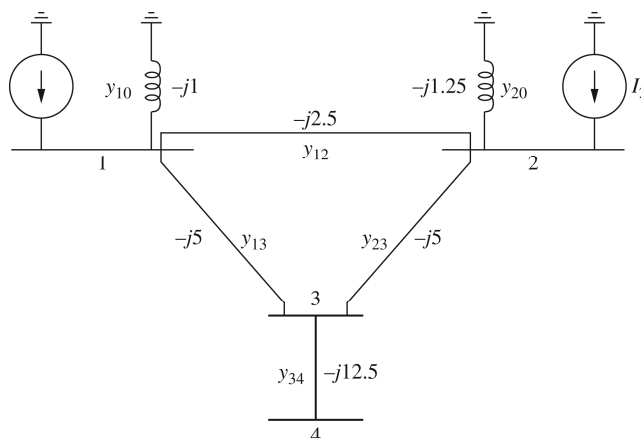
$$\bar{Y}_{bus} = \begin{bmatrix} 1 & -1 & 0 & 0 \\ -1 \left(1 + \frac{1}{2} + \frac{1}{3} + \frac{1}{4} - j1\right) & -\left(\frac{1}{3} - j1\right) & -\left(\frac{1}{4}\right) \\ 0 & -\left(\frac{1}{3} - j1\right) & \left(\frac{1}{3} - j1 + j\frac{1}{4} + j\frac{1}{2}\right) & -\left(j\frac{1}{4}\right) \\ 0 & -\left(\frac{1}{4}\right) & -\left(j\frac{1}{4}\right) & \left(\frac{1}{4} + j\frac{1}{4} - j\frac{1}{3}\right) \end{bmatrix}$$

Writing nodal equations by inspection:

$$\begin{bmatrix} 1 & -1 & 0 & 0 \\ -1(2.083 - j1) & (-0.3333 + j1) & -0.25 \\ 0(-0.3333 + j1)(0.3333 - j0.25) & -j0.25 \\ 0 & (-0.25) & -j0.25 & (0.25 - j0.08333) \end{bmatrix} \begin{bmatrix} \bar{V}_{10} \\ \bar{V}_{20} \\ \bar{V}_{30} \\ \bar{V}_{40} \end{bmatrix} = \begin{bmatrix} 1 \angle 0^\circ \\ 0 \\ 0 \\ 2 \angle 30^\circ \end{bmatrix}$$

Full file at <https://MyTestbank.eu/>

2.38 The admittance diagram for the system is shown below:



$$\bar{Y}_{BUS} = \begin{bmatrix} \bar{Y}_{11} & \bar{Y}_{12} & \bar{Y}_{13} & \bar{Y}_{14} \\ \bar{Y}_{21} & \bar{Y}_{22} & \bar{Y}_{23} & \bar{Y}_{24} \\ \bar{Y}_{31} & \bar{Y}_{32} & \bar{Y}_{33} & \bar{Y}_{34} \\ \bar{Y}_{41} & \bar{Y}_{42} & \bar{Y}_{43} & \bar{Y}_{44} \end{bmatrix} = j \begin{bmatrix} -8.5 & 2.5 & 5.0 & 0 \\ 2.5 & -8.75 & 5.0 & 0 \\ 5.0 & 5.0 & -22.5 & 12.5 \\ 0 & 0 & 12.5 & -12.5 \end{bmatrix} S$$

where  $\bar{Y}_{11} = \bar{y}_{10} + \bar{y}_{12} + \bar{y}_{13}; \bar{Y}_{22} = \bar{y}_{20} + \bar{y}_{12} + \bar{y}_{23}; \bar{Y}_{23} = \bar{y}_{13} + \bar{y}_{23} + \bar{y}_{34}$

$\bar{Y}_{44} = y_{34}; \bar{Y}_{12} = \bar{Y}_{21} = -\bar{y}_{12}; \bar{Y}_{13} = \bar{Y}_{31} = -\bar{y}_{13}; \bar{Y}_{23} = \bar{Y}_{32} = -\bar{y}_{23}$

and  $\bar{Y}_{34} = \bar{Y}_{43} = -\bar{y}_{34}$

2.39 (a)

$$\begin{bmatrix} \bar{Y}_c + \bar{Y}_d + \bar{Y}_f & -\bar{Y}_d & -\bar{Y}_c & -\bar{Y}_f \\ -\bar{Y}_d & \bar{Y}_b + \bar{Y}_d + \bar{Y}_e & -\bar{Y}_b & -\bar{Y}_e \\ -\bar{Y}_c & -\bar{Y}_b & \bar{Y}_a + \bar{Y}_b + \bar{Y}_c & 0 \\ -\bar{Y}_f & -\bar{Y}_e & 0 & \bar{Y}_e + \bar{Y}_f + \bar{Y}_g \end{bmatrix} \begin{bmatrix} \bar{V}_1 \\ \bar{V}_2 \\ \bar{V}_3 \\ \bar{V}_4 \end{bmatrix} = \begin{bmatrix} \bar{I}_1 = 0 \\ \bar{I}_2 = 0 \\ \bar{I}_3 \\ \bar{I}_4 \end{bmatrix}$$

(b)  $j \begin{bmatrix} -14.5 & 8 & 4 & 2.5 \\ 8 & -17 & 4 & 5 \\ 4 & 4 & -8.8 & 0 \\ 2.5 & 5 & 0 & -8.3 \end{bmatrix} \begin{bmatrix} \bar{V}_1 \\ \bar{V}_2 \\ \bar{V}_3 \\ \bar{V}_4 \end{bmatrix} = \begin{bmatrix} 0 \\ 0 \\ 1 \angle -90^\circ \\ 0.62 \angle -135^\circ \end{bmatrix}$

$\bar{Y}_{BUS} \bar{V} = \bar{I}; \bar{Y}_{BUS}^{-1} \bar{Y}_{BUS} \bar{V} = \bar{Y}_{BUS}^{-1} \bar{I}$

Full file at <https://MyTestbank.eu/>



Full file at <https://MyTestbank.eu/>

where  $\bar{Y}_{BUS}^{-1} = \bar{Z}_{BUS} = j \begin{bmatrix} 0.7187 & 0.6688 & 0.6307 & 0.6194 \\ 0.6688 & 0.7045 & 0.6242 & 0.6258 \\ 0.6307 & 0.7045 & 0.6840 & 0.5660 \\ 0.6194 & 0.6258 & 0.5660 & 0.6840 \end{bmatrix} \Omega$

$$\bar{V} = \bar{Y}_{BUS}^{-1} \bar{I}$$

where  $\bar{V} = \begin{bmatrix} \bar{V}_1 \\ \bar{V}_2 \\ \bar{V}_3 \\ \bar{V}_4 \end{bmatrix}$  and  $\bar{I} = \begin{bmatrix} 0 \\ 0 \\ 1 \angle -90^\circ \\ 0.62 \angle -135^\circ \end{bmatrix}$

Then solve for  $\bar{V}_1$ ,  $\bar{V}_2$ ,  $\bar{V}_3$ , and  $\bar{V}_4$ .

2.40 (a)  $\bar{V}_{AN} = \frac{240}{\sqrt{3}} \angle 0^\circ = 138.56 \angle 0^\circ \text{ V}$  (Assumed as Reference)

$$\bar{V}_{AB} = 240 \angle 30^\circ \text{ V}; \bar{V}_{BC} = 240 \angle -90^\circ \text{ V}; \bar{I}_A = 15 \angle -90^\circ \text{ A}$$

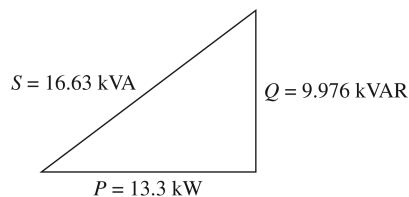
$$\bar{Z}_Y = \frac{\bar{V}_{AN}}{\bar{I}_A} = \frac{138.56 \angle 0^\circ}{15 \angle -90^\circ} = 9.24 \angle 90^\circ = (0 + j9.24) \Omega$$

(b)  $\bar{I}_{AB} = \frac{\bar{I}_A}{\sqrt{3}} \angle 30^\circ = \frac{15}{\sqrt{3}} \angle -90^\circ + 30^\circ = 8.66 \angle -60^\circ \text{ A}$

$$\bar{Z}_\Delta = \frac{\bar{V}_{AB}}{\bar{I}_{AB}} = \frac{240 \angle 30^\circ}{8.66 \angle -60^\circ} = 27.71 \angle 90^\circ = (0 + j27.71) \Omega$$

Note:  $\bar{Z}_Y = \bar{Z}_\Delta / 3$

2.41  $\bar{S}_{3\phi} = \sqrt{3} V_{LL} I_L \angle \cos^{-1}(pf)$   
 $= \sqrt{3} (480)(20) \angle \cos^{-1} 0.8$   
 $= 16.627 \times 10^3 \angle 36.87^\circ$   
 $= (13.3 \times 10^3) + j(9.976 \times 10^3)$



$$P_{3\phi} = \text{Re} \bar{S}_{3\phi} = 13.3 \text{ kW} \quad \text{Delivered}$$

$$Q_{3\phi} = \text{Im} \bar{S}_{3\phi} = 9.976 \text{ kVAR} \quad \text{Delivered}$$

2.42 (a) With  $\bar{V}_{ab}$  as reference

$$\bar{V}_{an} = \frac{208}{\sqrt{3}} \angle -30^\circ$$

$$\bar{Z}_\Delta = 4 + j3 = 5 \angle 36.87^\circ \Omega$$

$$\bar{I}_a = \frac{\bar{V}_{an}}{(\bar{Z}_\Delta / 3)} = \frac{120.1 \angle -30^\circ}{5 \angle 36.87^\circ} = 24.02 \angle -66.87^\circ \text{ A}$$

Full file at <https://MyTestbank.eu/>

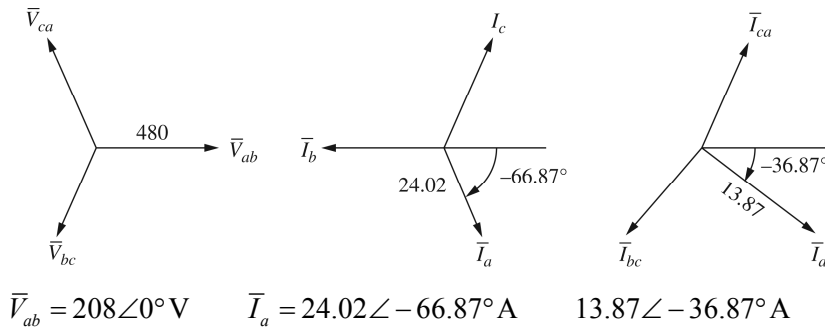
Full file at <https://MyTestbank.eu/>

$$\begin{aligned}\bar{S}_{3\phi} &= 3\bar{V}_{an}\bar{I}_a^* = 3(120.1\angle -30^\circ)(24.02\angle +66.87^\circ) \\ &= 8654\angle 36.87^\circ = 6923 + j5192\end{aligned}$$

$P_{3\phi} = 6923 \text{ W}; Q_{3\phi} = 5192 \text{ VAR}$ ; both absorbed by the load

$$pf = \cos(36.87^\circ) = 0.8 \text{ Lagging}; S_{3\phi} = |\bar{S}_{3\phi}| = 8654 \text{ VA}$$

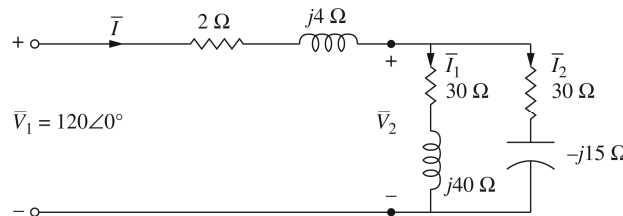
(b)



2.43 (a) Transforming the  $\Delta$ -connected load into an equivalent  $Y$ , the impedance per phase of the equivalent  $Y$  is

$$\bar{Z}_2 = \frac{60 - j45}{3} = (20 - j15) \Omega$$

With the phase voltage  $V_1 = \frac{120\sqrt{3}}{\sqrt{3}} = 120 \text{ V}$  taken as a reference, the per-phase equivalent circuit is shown below:



Total impedance viewed from the input terminals is

$$\bar{Z} = 2 + j4 + \frac{(30 + j40)(20 - j15)}{(30 + j40) + (20 - j15)} = 2 + j4 + 22 - j4 = 24 \Omega$$

$$\bar{I} = \frac{\bar{V}_1}{\bar{Z}} = \frac{120\angle 0^\circ}{24} = 5\angle 0^\circ \text{ A}$$

The three-phase complex power supplied =  $\bar{S} = 3\bar{V}_1 \bar{I}^* = 1800 \text{ W}$

$P = 1800 \text{ W}$  and  $Q = 0 \text{ VAR}$  delivered by the sending-end source

Full file at <https://MyTestbank.eu/>

Full file at <https://MyTestbank.eu/>

(b) Phase voltage at load terminals  $\bar{V}_2 = 120\angle 0^\circ - (2 + j4)(5\angle 0^\circ)$   
 $= 110 - j20 = 111.8\angle -10.3^\circ \text{ V}$

The line voltage magnitude at the load terminal is

$$(V_{\text{LOAD}})_{L-L} = \sqrt{3} 111.8 = 193.64 \text{ V}$$

(c) The current per phase in the Y-connected load and in the equiv. Y of the  $\Delta$ -load:

$$\bar{I}_1 = \frac{\bar{V}_2}{\bar{Z}_1} = 1 - j2 = 2.236\angle -63.4^\circ \text{ A}$$

$$\bar{I}_2 = \frac{\bar{V}_2}{\bar{Z}_2} = 4 + j2 = 4.472\angle 26.56^\circ \text{ A}$$

The phase current magnitude in the original  $\Delta$ -connected load

$$(I_{ph})_\Delta = \frac{I_2}{\sqrt{3}} = \frac{4.472}{\sqrt{3}} = 2.582 \text{ A}$$

(d) The three-phase complex power absorbed by each load is

$$\bar{S}_1 = 3\bar{V}_2\bar{I}_1^* = 430 \text{ W} + j600 \text{ VAR}$$

$$\bar{S}_2 = 3\bar{V}_2\bar{I}_2^* = 1200 \text{ W} - j900 \text{ VAR}$$

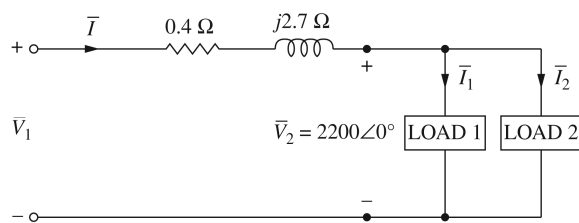
The three-phase complex power absorbed by the line is

$$\bar{S}_L = 3(R_L + jX_L)I^2 = 3(2 + j4)(5)^2 = 150 \text{ W} + j300 \text{ VAR}$$

The sum of load powers and line losses is equal to the power delivered from the supply:

$$\begin{aligned} \bar{S}_1 + \bar{S}_2 + \bar{S}_L &= (450 + j600) + (1200 - j900) + (150 + j300) \\ &= 1800 \text{ W} + j0 \text{ VAR} \end{aligned}$$

**2.44** (a) The per-phase equivalent circuit for the problem is shown below:



Phase voltage at the load terminals is  $V_2 = \frac{2200\sqrt{3}}{\sqrt{3}} = 2200 \text{ V}$  taken as Ref.

Total complex power at the load end or receiving end is

$$\bar{S}_{R(3\phi)} = 560.1(0.707 + j0.707) + 132 = 528 + j396 = 660\angle 36.87^\circ \text{ kVA}$$

Full file at <https://MyTestbank.eu/>

With phase voltage  $\bar{V}_2$  as reference,

$$\bar{I} = \frac{\bar{S}_{R(3\phi)}^*}{3\bar{V}_2^*} = \frac{660,000\angle -36.87^\circ}{3(2200\angle 0^\circ)} = 100\angle -36.87^\circ \text{ A}$$

Phase voltage at sending end is given by

$$\bar{V}_1 = 2200\angle 0^\circ + (0.4 + j2.7)(100\angle -36.87^\circ) = 2401.7\angle 4.58^\circ \text{ V}$$

The magnitude of the line to line voltage at the sending end of the line is

$$(V_1)_{L-L} = \sqrt{3}V_1 = \sqrt{3}(2401.7) = 4160 \text{ V}$$

(b) The three-phase complex-power loss in the line is given by

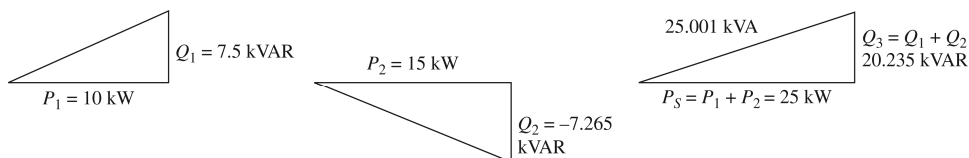
$$\begin{aligned} \bar{S}_{L(3\phi)} &= 3RI^2 + j3 \times I^2 = 3(0.4)(100^2) + j3(2.7)(100)^2 \\ &= 12 \text{ kW} + j81 \text{ kVAR} \end{aligned}$$

(c) The three-phase sending power is

$$\begin{aligned} \bar{S}_{S(3\phi)} &= 3\bar{V}_1\bar{I}^* = 3(2401.7\angle 4.58^\circ)(100\angle 36.87^\circ) \\ &= 540 \text{ kW} + j477 \text{ kVAR} \end{aligned}$$

Note that  $\bar{S}_{S(3\phi)} = \bar{S}_{R(3\phi)} + \bar{S}_{L(3\phi)}$

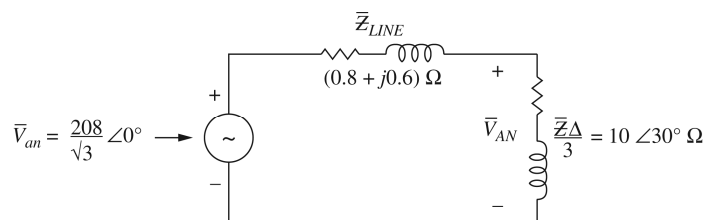
2.45 (a)



$$I_s = \frac{S_s}{\sqrt{3}V_{LL}} = \frac{25.001 \times 10^3}{\sqrt{3}(480)} = 30.07 \text{ A}$$

(b) The ammeter reads zero, because in a balanced three-phase system, there is no neutral current.

2.46 (a)



Full file at <https://MyTestbank.eu/>

Full file at <https://MyTestbank.eu/>

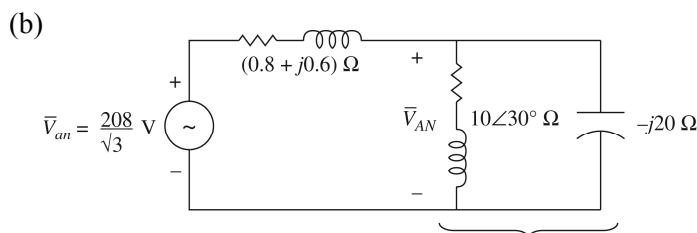
Using voltage division:  $\bar{V}_{AN} = \bar{V}_{an} \frac{\bar{Z}_{\Delta}/3}{(\bar{Z}_{\Delta}/3) + \bar{Z}_{LINE}}$

$$= \frac{208}{\sqrt{3}} \angle 0^{\circ} \frac{10 \angle 30^{\circ}}{10 \angle 30^{\circ} + (0.8 + j0.6)}$$

$$= \frac{(120.09)(10 \angle 30^{\circ})}{9.46 + j5.6} = \frac{1200.9 \angle 30^{\circ}}{10.99 \angle 30.62^{\circ}}$$

$$= 109.3 \angle -0.62^{\circ} \text{ V}$$

Load voltage =  $V_{AB} = \sqrt{3} (109.3) = 189.3 \text{ V Line-to-Line}$



$$\bar{Z}_{eq} = 10 \angle 30^{\circ} \parallel (-j20)$$

$$= 11.547 \angle 0^{\circ} \Omega$$

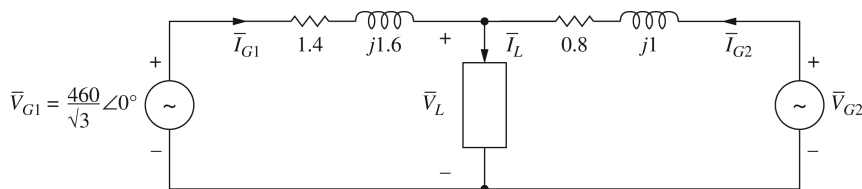
$$\bar{V}_{AN} = \bar{V}_{an} \frac{\bar{Z}_{eq}}{\bar{Z}_{eq} + \bar{Z}_{LINE}}$$

$$= \left( \frac{208}{\sqrt{3}} \right) \frac{11.547}{(11.547 + 0.8 + j0.6)}$$

$$= \frac{1386.7}{12.362 \angle 2.78^{\circ}} = 112.2 \angle -2.78^{\circ} \text{ V}$$

Load voltage Line-to-Line  $V_{AB} = \sqrt{3} (112.2) = 194.3 \text{ V}$

2.47



(a)  $\bar{I}_{G1} = \frac{15 \times 10^3}{\sqrt{8}(460)(0.8)} \angle -\cos^{-1} 0.8 = 23.53 \angle -36.87^{\circ} \text{ A}$

$$\bar{V}_L = \bar{V}_{G1} - \bar{Z}_{LINE1} \bar{I}_{G1} = \frac{460}{\sqrt{3}} \angle 0^{\circ} - (1.4 + j1.6)(23.53 \angle -36.87^{\circ})$$

$$= 216.9 \angle -2.73^{\circ} \text{ V Line to Neutral}$$

Load Voltage  $V_L = \sqrt{3} 216.9 = 375.7 \text{ V Line to line}$

Full file at <https://MyTestbank.eu/>

Full file at <https://MyTestbank.eu/>

$$(b) \bar{I}_L = \frac{30 \times 10^3}{\sqrt{3}(375.7)(0.8)} \angle -2.73^\circ - \cos^{-1} 0.8 = 57.63 \angle -39.6^\circ \text{ A}$$

$$\bar{I}_{G2} = \bar{I}_L - \bar{I}_{G1} = 57.63 \angle -39.6^\circ - 23.53 \angle -36.87^\circ$$

$$= 34.14 \angle -41.49^\circ \text{ A}$$

$$\bar{V}_{G2} = \bar{V}_L + \bar{Z}_{LINE2} \bar{I}_{G2} = 216.9 \angle -2.73^\circ + (0.8 + j1)(34.14 \angle -41.49^\circ)$$

$$= 259.7 \angle -0.63^\circ \text{ V}$$

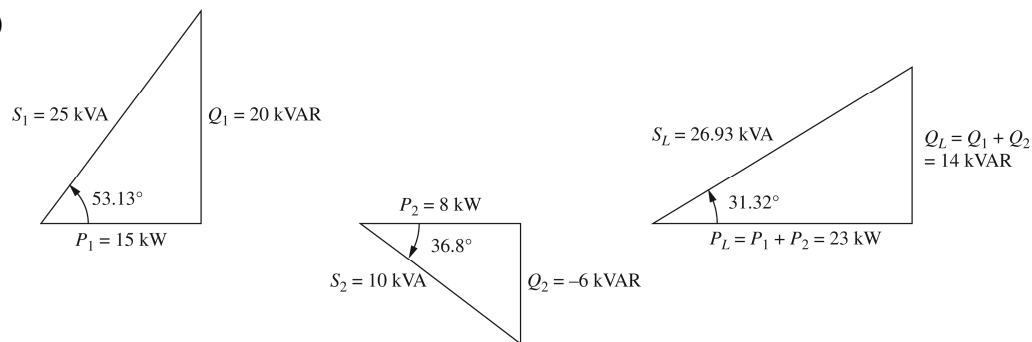
Generator 2 line-to-line voltage  $V_{G2} = \sqrt{3}(259.7)$   
 $= 449.8 \text{ V}$

$$(c) \bar{S}_{G2} = 3\bar{V}_{G2} \bar{I}_{G2}^* = 3(259.7 \angle -0.63^\circ)(34.14 \angle 41.49^\circ)$$

$$= 20.12 \times 10^3 + j17.4 \times 10^3$$

$P_{G2} = 20.12 \text{ kW}; Q_{G2} = 17.4 \text{ kVAR};$  Both delivered

2.48 (a)



(b)  $pf = \cos 31.32^\circ = 0.854$  Lagging

$$(c) I_L = \frac{S_L}{\sqrt{3}V_{LL}} = \frac{26.93 \times 10^3}{\sqrt{3}(480)} = 32.39 \text{ A}$$

$$(d) Q_C = Q_L = 14 \times 10^3 \text{ VAR} = 3(V_{LL})^2 / X_\Delta$$

$$X_\Delta = \frac{3(480)^2}{14 \times 10^3} = 49.37 \Omega$$

$$(e) I_C = V_{LL} / X_\Delta = 480 / 49.37 = 9.72 \text{ A}$$

$$I_{LINE} = \frac{P_L}{\sqrt{3} V_{LL}} = \frac{23 \times 10^3}{\sqrt{3} 480} = 27.66 \text{ A}$$

Full file at <https://MyTestbank.eu/>

Full file at <https://MyTestbank.eu/>

2.49 (a) Let  $\bar{Z}_Y = \bar{Z}_A = \bar{Z}_B = \bar{Z}_C$  for a balanced Y-load

$$\bar{Z}_\Delta = \bar{Z}_{AB} = \bar{Z}_{BC} = \bar{Z}_{CA}$$

Using equations in Fig. 2.27

$$\bar{Z}_\Delta = \frac{\bar{Z}_Y^2 + \bar{Z}_Y^2 + \bar{Z}_Y^2}{\bar{Z}_Y} = 3\bar{Z}_Y$$

and

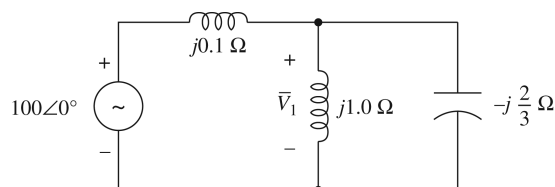
$$\bar{Z}_Y = \frac{\bar{Z}_\Delta^2}{\bar{Z}_\Delta + \bar{Z}_\Delta + \bar{Z}_\Delta} = \frac{\bar{Z}_\Delta}{3}$$

$$(b) \bar{Z}_A = \frac{(j10)(-j25)}{j10 + j20 - j25} = -j50 \Omega$$

$$\bar{Z}_B = \frac{(j10)(j20)}{j5} = j40 \Omega; \bar{Z}_C = \frac{(j20)(-j25)}{j5} = -j100 \Omega$$

2.50 Replace delta by the equivalent WYE:  $\bar{Z}_Y = -j\frac{2}{3} \Omega$

Per-phase equivalent circuit is shown below:



Noting that  $\left( j1.0 \parallel -j\frac{2}{3} \right) = -j2$ , by voltage-divider law,

$$\bar{V}_1 = \frac{-j2}{-j2 + j0.1} (100\angle 0^\circ) = 105\angle 0^\circ$$

$$\therefore v_1(t) = 105\sqrt{2} \cos(\omega t + 0^\circ) = 148.5 \cos \omega t \text{ V} \leftarrow$$

In order to find  $i_2(t)$  in the original circuit, let us calculate  $\bar{V}_{A'B'}$

$$\bar{V}_{A'B'} = \bar{V}_{A'N'} - \bar{V}_{B'N'} = \sqrt{3} e^{j30^\circ} \bar{V}_{A'N'} = 173.2\angle 30^\circ$$

Then 
$$\bar{I}_{A'B'} = \frac{173.2\angle 30^\circ}{-j2} = 86.6\angle 120^\circ$$

$$\begin{aligned} \therefore i_2(t) &= 86.6\sqrt{2} \cos(\omega t + 120^\circ) \\ &= 122.5 \cos(\omega t + 120^\circ) \text{ A} \leftarrow \end{aligned}$$

Full file at <https://MyTestbank.eu/>

2.51 On a per-phase basis  $\bar{S}_1 = \frac{1}{3}(150 + j120) = (50 + j40) \text{ kVA}$

$$\therefore \bar{I}_1 = \frac{(50 - j40)10^3}{2000} = (25 - j20) \text{ A}$$

Note: PF Lagging

Load 2: Convert  $\Delta$  into an equivalent Y

$$\bar{Z}_{2Y} = \frac{1}{3}(150 - j48) = (50 - j16) \Omega$$

$$\therefore \bar{I}_2 = \frac{2000 \angle 0^\circ}{50 - j16} = 38.1 \angle 17.74^\circ$$

$$= (36.29 + j11.61) \text{ A}$$

Note: PF Leading

$$\bar{S}_3 \text{ per phase} = \frac{1}{3}[(120 \times 0.6) - j120 \sin(\cos^{-1} 0.6)] = (24 - j32) \text{ kVA}$$

$$\therefore \bar{I}_3 = \frac{(24 + j32)10^3}{2000} = (12 + j16) \text{ A}$$

Note: PF Leading

Total current drawn by the three parallel loads  $\bar{I}_T = \bar{I}_1 + \bar{I}_2 + \bar{I}_3$ 

$$\bar{I}_{TOTAL} = (73.29 + j7.61) \text{ A}$$

Note: PF Leading

$$\text{Voltage at the sending end: } \bar{V}_{AN} = 2000 \angle 0^\circ + (73.29 + j7.61)(0.2 + j1.0)$$

$$= 2007.05 + j74.81 = 2008.44 \angle 2.13^\circ \text{ V}$$

$$\text{Line-to-line voltage magnitude at the sending end} = \sqrt{3}(2008.44) = 3478.62 \text{ V} \leftarrow$$

2.52 (a) Let  $\bar{V}_{AN}$  be the reference:  $\bar{V}_{AN} = \frac{2160}{\sqrt{3}} \angle 0^\circ \approx 2400 \angle 0^\circ \text{ V}$

$$\text{Total impedance per phase } \bar{Z} = (4.7 + j9) + (0.3 + j1) = (5 + j10) \Omega$$

$$\therefore \text{Line Current} = \frac{2400 \angle 0^\circ}{5 + j10} = 214.7 \angle -63.4^\circ \text{ A} = \bar{I}_A \leftarrow$$

With positive A-B-C phase sequence,

$$\bar{I}_B = 214.7 \angle -183.4^\circ \text{ A}; \bar{I}_C = 214.7 \angle -303.4^\circ = 214.7 \angle 56.6^\circ \text{ A} \leftarrow$$

Full file at <https://MyTestbank.eu/>



Full file at <https://MyTestbank.eu/>

$$\begin{aligned}
 \text{(b) } (\bar{V}_{A'N})_{LOAD} &= 2400\angle 0^\circ - [(214.7\angle -63.4^\circ)(0.3 + j1)] \\
 &= 2400\angle 0^\circ - 224.15\angle 9.9^\circ = 2179.2 - j38.54 \\
 &= 2179.5\angle -1.01^\circ \text{ V} \leftarrow \\
 (\bar{V}_{B'N})_{LOAD} &= 2179.5\angle -121.01^\circ \text{ V}; (\bar{V}_{C'N})_{LOAD} = 2179.5\angle -241.01^\circ \text{ V} \\
 \text{(c) } S/\text{Phase} &= (V_{A'N})_{LOAD} I_A = (2179.5)(214.7) = 467.94 \text{ kVA} \leftarrow \\
 \text{Total apparent power dissipated in all three phases in the load} \\
 [S_{3\phi}]_{LOAD} &= 3(467.94) = 1403.82 \text{ kVA} \leftarrow \\
 \text{Active power dissipated per phase in load} &= (P_{1\phi})_{LOAD} \\
 &= (2179.5)(214.7)\cos(62.39^\circ) = 216.87 \text{ kW} \leftarrow \\
 \therefore [P_{3\phi}]_{LOAD} &= 3(216.87) = 650.61 \text{ kW} \leftarrow \\
 \text{Reactive power dissipated per phase in load} &= (Q_{1\phi})_{LOAD} \\
 &= (2179.5)(214.7)\sin(62.39^\circ) = 414.65 \text{ kVAR} \leftarrow \\
 \therefore [Q_{3\phi}]_{LOAD} &= 3(414.65) = 1243.95 \text{ kVAR} \leftarrow \\
 \text{(d) Line losses per phase } (P_{1\phi})_{LOSS} &= (214.7)^2 0.3 = 13.83 \text{ kW} \leftarrow \\
 \text{Total line loss } (P_{3\phi})_{LOSS} &= 13.83 \times 3 = 41.49 \text{ kW} \leftarrow
 \end{aligned}$$

Full file at <https://MyTestbank.eu/>

Full file at <https://MyTestbank.eu/>

Full file at <https://MyTestbank.eu/>